



**Surname** \_\_\_\_\_

**Other Names** \_\_\_\_\_

**Centre Number** \_\_\_\_\_

**Candidate Number** \_\_\_\_\_

**Candidate Signature** \_\_\_\_\_

**GCSE  
CITIZENSHIP STUDIES**

**Paper 2**

**8100/2R**

**Monday 17 June 2019 Morning**

**Time allowed: 1 hour 45 minutes**

**At the top of the page, write your surname and other names, your centre number, your candidate number and add your signature.**

**[Turn over]**



# BLANK PAGE



**You will need no other materials.**

## **INSTRUCTIONS**

- **Use black ink or black ball-point pen.**
- **Answer ALL questions.**
- **You must answer the questions in the spaces provided.**  
**Do NOT write on blank pages.**
- **Do all rough work in this book. Cross through any work you do not want to be marked.**

## **INFORMATION**

- **The marks for questions are shown in brackets.**
- **The maximum mark for this paper is 80.**

**DO NOT TURN OVER UNTIL TOLD TO DO SO**



**SECTION A****LIFE IN MODERN BRITAIN**

**Answer ALL questions in this section.**

**For each question completely fill in the circle alongside the appropriate answer.**

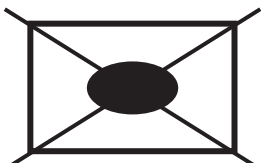
**CORRECT METHOD**



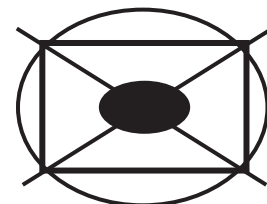
**WRONG METHODS**



**If you want to change your answer you must cross out your original answer as shown.**



**If you wish to return to an answer previously crossed out, ring the answer you now wish to select as shown.**



0	1	.	1
---	---	---	---

**Which of the following organisations regulates television and radio in the UK?**

**Shade in the ONE correct answer. [1 mark]**

**A IPSO**

**B DVLA**

**C Ofcom**

**D Ofsted**

**[Turn over]**



**0 1 . 2**

**Identify TWO examples of social media.  
[2 marks]**

**1** \_\_\_\_\_

\_\_\_\_\_

\_\_\_\_\_

**2** \_\_\_\_\_

\_\_\_\_\_

\_\_\_\_\_



**01 . 3 SOURCE A**

## **‘The Freedom of the Media’**

**Following the Leveson Report 2012 into phone tapping by newspapers, concerns were raised over the freedom of the media to intrude into people’s personal lives.**

**During the 2016 US Presidential election, similar concerns were raised about social media. According to Stanford University, 60% of American adults got their news about the election from social media. Social media was used to share 40 million fake news stories during the election.**

**This situation has led some people to question whether democracy is undermined by too much media freedom.**

**[Turn over]**



**Referring to SOURCE A, discuss TWO reasons why restricting the freedom of the media could strengthen democracy. [4 marks]**

**Reason 1:** \_\_\_\_\_

\_\_\_\_\_

\_\_\_\_\_

\_\_\_\_\_

\_\_\_\_\_

**Reason 2:** \_\_\_\_\_

\_\_\_\_\_

\_\_\_\_\_

\_\_\_\_\_

\_\_\_\_\_





**0 2 . 1**

**What percentage of the UK's population lives in England?**

**Shade in the ONE correct answer.  
[1 mark]**

**A 94%**

**B 84%**

**C 74%**

**D 64%**

**[Turn over]**



0	2	.	2
---	---	---	---

**Using ONE example, explain the term 'global identity'. [2 marks]**

---

---

---

---

---

---

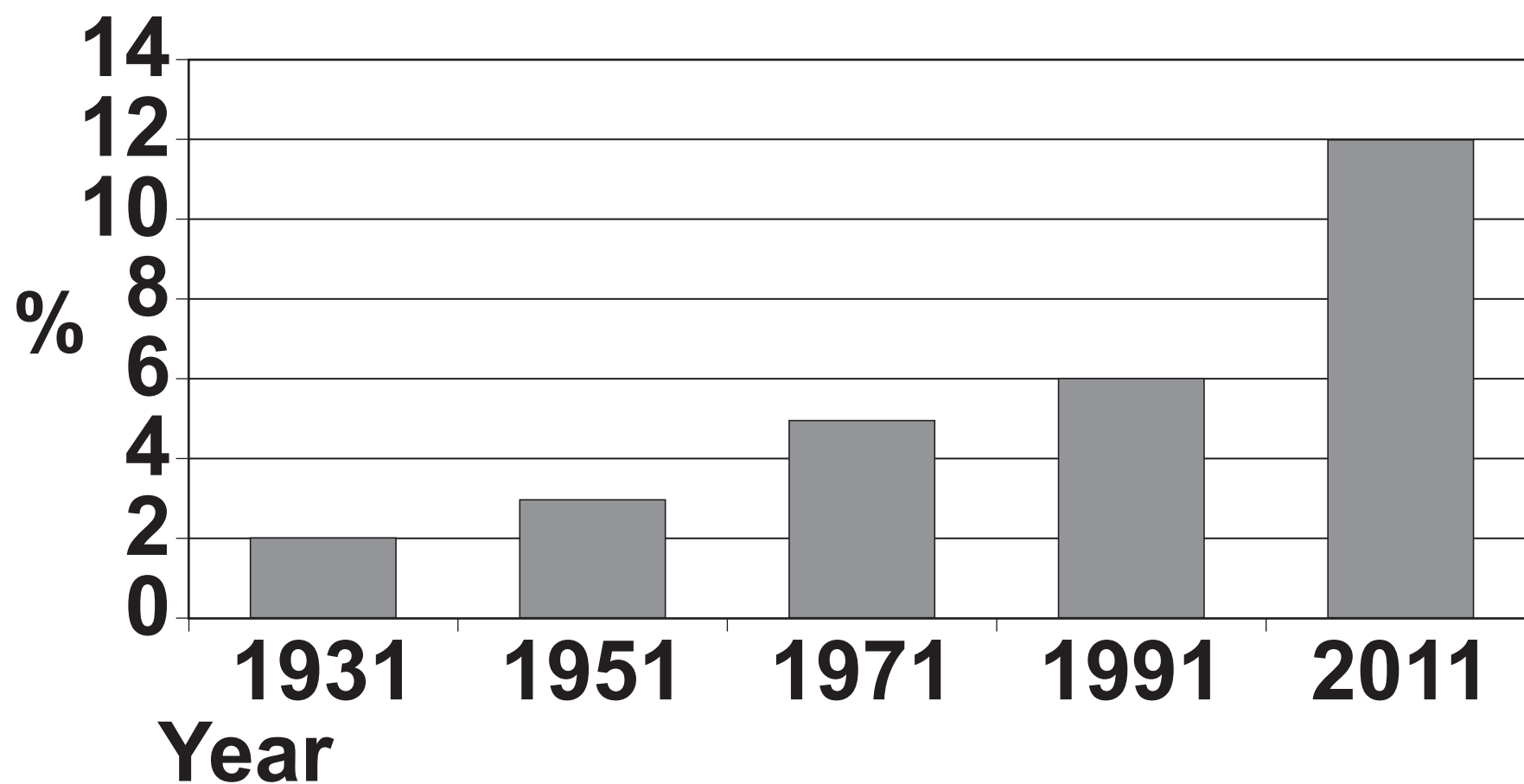
---

---



**0 2 . 3 SOURCE B**

**‘The changing percentage of the UK’s population not born in the UK’**



**Describe TWO reasons for the changes in the UK’s population shown by the graph in SOURCE B. [4 marks]**

**Reason 1:** \_\_\_\_\_

\_\_\_\_\_

**[Turn over]**



---

---

---

---

**Reason 2:** \_\_\_\_\_

---

---

---

---

---

---

---

---



03 . 1

**The United Kingdom is a permanent member of the UN Security Council.**

**Identify TWO other permanent members of the UN Security Council. [2 marks]**

1 \_\_\_\_\_

\_\_\_\_\_

\_\_\_\_\_

2 \_\_\_\_\_

\_\_\_\_\_

\_\_\_\_\_

**[Turn over]**



0	3	.	2
---	---	---	---

**Explain the purpose of the World Trade Organisation (WTO). [1 mark]**

---

---

---



0	3	.	3
---	---	---	---

**Which of the following is the Head of the Commonwealth?**

**Shade in the ONE correct answer.  
[1 mark]**

- A The UK Prime Minister**
- B The Prince of Wales**
- C The UK Monarch**
- D The Duke of Cambridge**

**[Turn over]**



**03 . 4 SOURCE C**

## **‘The Commonwealth’**

**The strengths of the Commonwealth, which make it an important international organisation, allow it to help its member countries tackle the problems they face.**

**The Commonwealth helps its member countries develop projects to tackle the effect of climate change. These projects often use green technology to promote more sustainable ways of living.**

**The Commonwealth also helps its member countries build more harmonious and cohesive communities and to create strategies to tackle the underlying causes of extremism.**





**With reference to SOURCE C discuss TWO strengths of the Commonwealth which allow it to help its member countries tackle the problems they face. [4 marks]**

**Strength 1:** \_\_\_\_\_

---

---

---

---

---

---

---

---

---

---

**Strength 2:** \_\_\_\_\_

---

**[Turn over]**



---

---

---

---

---

8
---



0	4	.	1
---	---	---	---

**At what age were people allowed to vote in the 2014 Scottish Independence referendum?**

**Shade in the ONE correct answer.  
[1 mark]**

**A 16**

**B 17**

**C 18**

**D 21**

**[Turn over]**



**04 . 2**

**‘Young people have a responsibility to participate in the democratic process.’**

**Examine the case for OR against this statement. [8 marks]**

---

---

---

---

---

---

---

---

---

---

---

---

---

---

---

---

---

---

---

---

---

---

---

---

---

---

---

---

---

---

---

---

---

---

---

---

---

---

---

---

---

---

---

---

[Turn over]





0	5	.	1
---	---	---	---

**Name ONE method a pressure group could use to achieve its aim. [1 mark]**

---

---

---

**[Turn over]**



**05 . 2**

**‘Political parties strengthen democracy in the UK by providing citizens with a voice.’**

**To what extent do you agree with this statement?**

**In your answer you should consider:**

- **the role played by political parties in the UK**
  - **the barriers which prevent citizens from participating in democracy**
  - **the opportunities for citizens to participate in democracy.**
- [8 marks]**
- 
- 
- 
- 





---

---

---

---

---

---

---

---

---

---

---

---

---

---

---

---

---

---

---

---

---

---

---

---

---

---

---

---

---

---

---

---

[Turn over]



---

---

---

---

---

---

---

---

---

---

---

---

---

---

---

---

---

---

---

---

---

---

---



---

---

---

---

**[Turn over]**




**SECTION B****RIGHTS AND RESPONSIBILITIES**

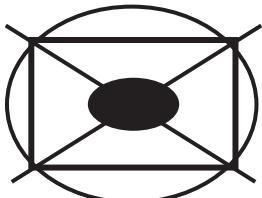
Answer ALL questions in this section.

For each question completely fill in the circle alongside the appropriate answer.

**CORRECT METHOD** 

**WRONG METHODS** 

If you want to change your answer you must cross out your original answer as shown. 

If you wish to return to an answer previously crossed out, ring the answer you now wish to select as shown. 



0	6	.	1
---	---	---	---

**In which of the following Courts would a murder trial take place?**

**Shade in the ONE correct answer.  
[1 mark]**

- A Family Court**
- B Magistrates' Court**
- C County Court**
- D Crown Court**

**[Turn over]**



0	6	.	2
---	---	---	---

**Which TWO of the following are examples of methods of Alternative Dispute Resolution?**

**Shade in the TWO correct answers.  
[2 marks]**

- A Imposition**
- B Mediation**
- C Arbitration**
- D Restoration**



**06 . 3 SOURCE D**

**‘Differing legal systems’**

**In the fictional country of Eastland judges are elected by the citizens, who must be 21 or over to vote. All citizens are expected to vote in all elections. If a citizen does not vote they will be fined £1000.**

**Judges hear cases in court. For serious crimes, such as murder, they will decide both the guilt of the accused and the sentence to be passed if the accused is found guilty.**

**Using SOURCE D, discuss TWO reasons why the UK legal system is different to the legal system in Eastland. [4 marks]**

**[Turn over]**



**Reason 1:** \_\_\_\_\_

---

---

---

---

---

---

---

---

**Reason 2:** \_\_\_\_\_

---

---

---

---

---

---

---

---





0	7	.	1
---	---	---	---

**What does TUC stand for?**

**Shade in the ONE correct answer.  
[1 mark]**

- A Trades Union Convention**
- B Trades Union Congress**
- C Trades Union Charter**
- D Trades Union Council**

**[Turn over]**



07 . 2

**Identify TWO roles of trade unions.  
[2 marks]**

1 \_\_\_\_\_

\_\_\_\_\_

\_\_\_\_\_

2 \_\_\_\_\_

\_\_\_\_\_

\_\_\_\_\_



0	7	.	3
---	---	---	---

## **SOURCE E**

### **‘The 2016 junior doctors’ strike’**

**In 2016 junior doctors went on strike over proposed changes to their working conditions. Approximately 50% of all junior doctors voted in favour of going on strike.**

**It has been claimed that this strike had a negative impact upon patient care. During the strike an estimated 294 844 hospital appointments were cancelled and there was a significant drop in Accident and Emergency admissions.**

**With reference to SOURCE E, discuss TWO reasons why a government may attempt to restrict the actions of trade unions. [4 marks]**

**[Turn over]**



**Reason 1:** \_\_\_\_\_

---

---

---

---

---

---

---

---

**Reason 2:** \_\_\_\_\_

---

---

---

---

---

---

---

---



0	8
---	---

**SOURCE F****‘Types of crime’****A – Criminal damage****B – Environmental crime****C – Tax evasion****D – Anti-social behaviour**

0	8	.	1
---	---	---	---

**Which ONE of the crimes in SOURCE F may involve acts such as arson?**

**Shade in the ONE correct answer.  
[1 mark]**

<input type="checkbox"/>	<b>A</b>	<input type="checkbox"/>	<b>B</b>	<input type="checkbox"/>	<b>C</b>	<input type="checkbox"/>	<b>D</b>
--------------------------	----------	--------------------------	----------	--------------------------	----------	--------------------------	----------

**[Turn over]**

0	8	.	2
---	---	---	---

**Which ONE of the crimes in SOURCE F may involve acts such as drinking in the street?**

**Shade in the ONE correct answer.  
[1 mark]**

**A**    **B**    **C**    **D**



08 . 3

**Identify TWO examples of a non-custodial sentence. [2 marks]**

1 \_\_\_\_\_

\_\_\_\_\_

\_\_\_\_\_

2 \_\_\_\_\_

\_\_\_\_\_

\_\_\_\_\_

**[Turn over]**



**08 . 4 SOURCE G**

### **‘Purposes of sentencing’**

**A drug dealer was found guilty of possession with intent to supply heroin, possession with intent to supply cocaine and possession of cannabis. He was sentenced to three years in prison.**

**The judge was very clear in what the purpose of this sentence was.**

**He said that “this is a warning to anyone involved in dealing drugs that the legal system is committed to using all the powers it has to tackle this social problem.”**

**With reference to SOURCE G, discuss TWO further purposes of sentencing a drug dealer. [4 marks]**





**Purpose 1:** \_\_\_\_\_

---

---

---

---

---

---

---

---

**Purpose 2:** \_\_\_\_\_

---

---

---

---

---

---

---

---

**[Turn over]**



**09 . 1**

**How many countries have signed the United Nations' Universal Declaration of Human Rights?**

**Shade in the ONE correct answer.  
[1 mark]**

**A 28**

**B 53**

**C 161**

**D 192**



09 . 2

**‘Universal human rights are not protected effectively.’**

**Examine the case for OR against this statement. [8 marks]**

---

---

---

---

---

---

---

---

---

---

**[Turn over]**



---

---

---

---

---

---

---

---

---

---

---

---

---

---

---

---

---

---

---

---

---

---

---



---

---

---

---

---

---

---

---

---

---

---

---

---

---

---

---

---

---

---

---

---

---

---

---

**[Turn over]**



1	0	.	1
---	---	---	---

**Explain the term ‘advocacy’. [1 mark]**

---

---

---

1	0	.	2
---	---	---	---

**‘Voluntary groups are a very effective means by which the citizen can bring about change in their community.’**

**Considering a range of views, to what extent do you agree OR disagree with this statement?**

**In your answer you should consider:**

- **how voluntary groups support citizens to bring about change in their communities**



- **how public services and local government bring about change in the community.  
[8 marks]**

---



---



---



---



---



---



---



---



---



---



---



---



---



---



---

**[Turn over]**



---

---

---

---

---

---

---

---

---

---

---

---

---

---

---

---

---

---

---

---

---

---

---





---

---

---

---

---

---

---

---

---

---

---

---

---

**END OF QUESTIONS**



**BLANK PAGE**

For Examiner's Use	
Question	Mark
1	
2	
3	
4	
5	
6	
7	
8	
9	
10	
<b>TOTAL</b>	

**Copyright information**

For confidentiality purposes, from the November 2015 examination series, acknowledgements of third-party copyright material are published in a separate booklet rather than including them on the examination paper or support materials. This booklet is published after each examination series and is available for free download from [www.aqa.org.uk](http://www.aqa.org.uk) after the live examination series.

Permission to reproduce all copyright material has been applied for. In some cases, efforts to contact copyright-holders may have been unsuccessful and AQA will be happy to rectify any omissions of acknowledgements. If you have any queries please contact the Copyright Team, AQA, Stag Hill House, Guildford, GU2 7XJ.

Copyright © 2019 AQA and its licensors. All rights reserved.

**G/TI/Jun19/8100/2R/E3**

5 0



1 9 6 G 8 1 0 0 / 2 R